
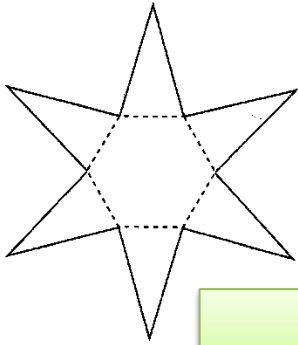


ใบงานที่ 1 เรื่อง รูปคลี่ของรูปเรขาคณิต


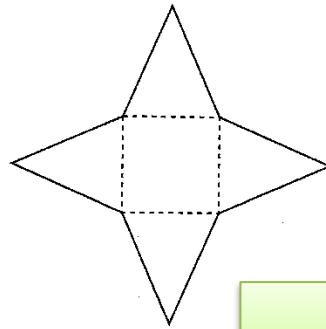
ชื่อ.....ชั้น.....เลขที่.....

คำสั่ง ให้นักเรียนบอกว่ารูปต่อไปนี้ เป็นรูปคลี่ของรูปเรขาคณิตสามมิติใด


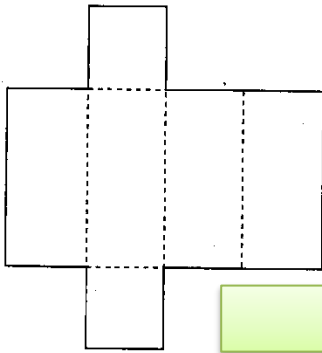
(1)



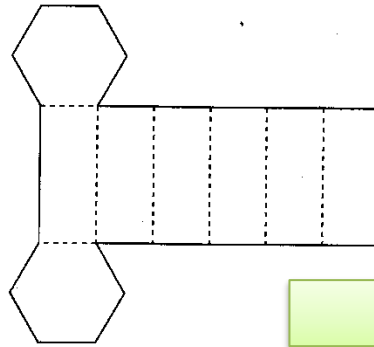
(2)




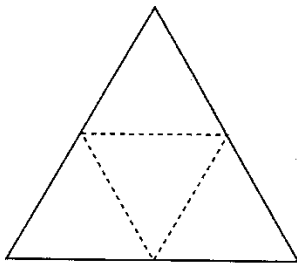
(3)




(4)



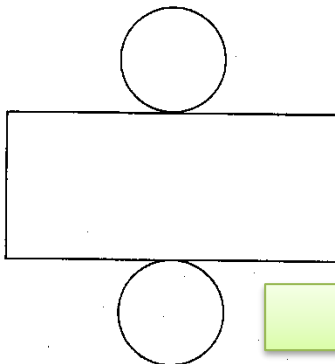
(5)



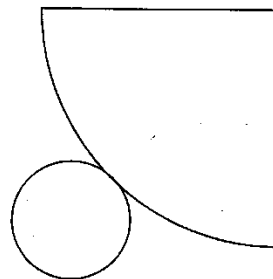
(6)



(7)



(8)



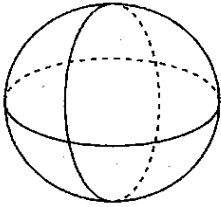
ใบงานที่ 2 เรื่อง รูปเรขาคณิตสามมิติ

ชื่อ.....ชั้น.....เลขที่.....

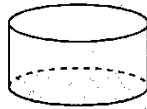
คำสั่ง ให้นักเรียนตอบคำถามต่อไปนี้

จงบอกชื่อรูปเรขาคณิตสามมิติที่กำหนดให้ต่อไปนี้

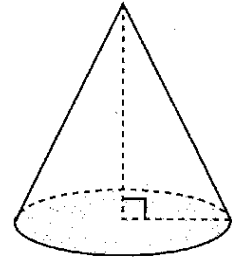
(1)



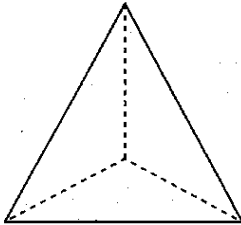
(2)



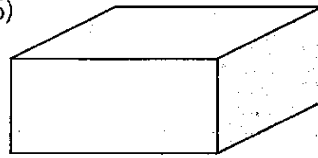
(3)



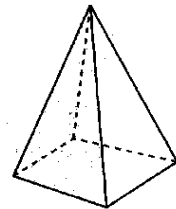
(4)



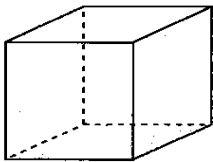
(5)



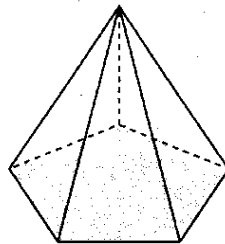
(6)



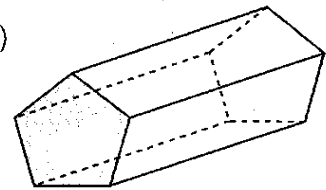
(7)



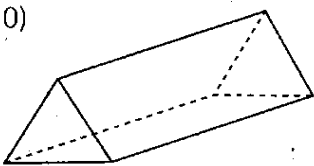
(8)



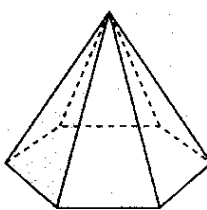
(9)



(10)



(11)



(12)

